


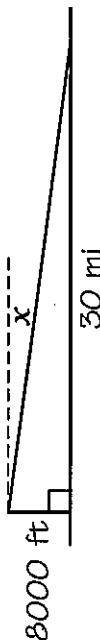
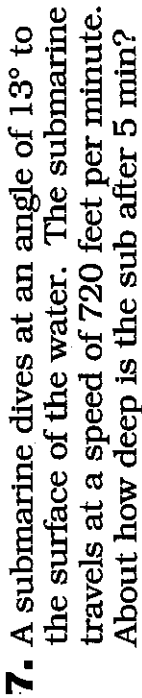
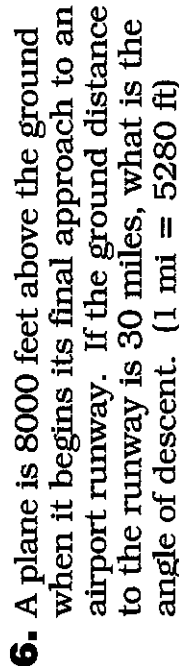
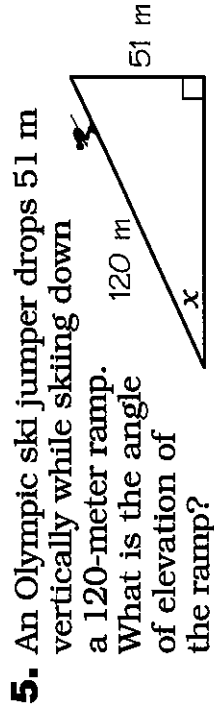
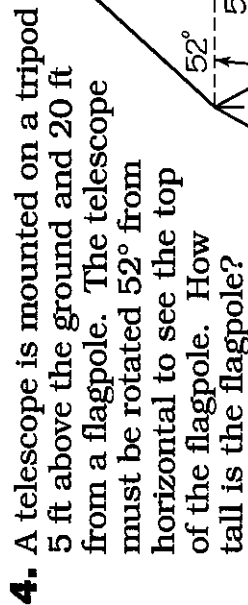
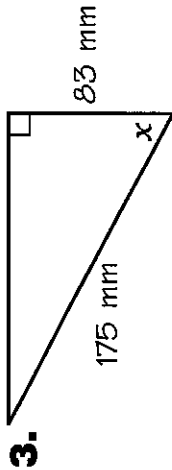
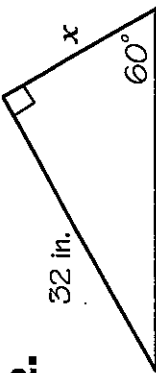
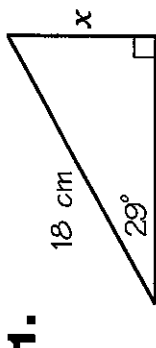
Team Name: \_\_\_\_\_

Partner A: \_\_\_\_\_

# What Do You Get

1.	2.	3.	4.	5.	6.	7.	8.	9.	?
----	----	----	----	----	----	----	----	----	---

Find the measure of the side or angle labeled  $x$ , or solve the problem. Write the word next to your answer in the corresponding box above.



Answers

810 ft WITH

5° GAME

25° BASEBALL

8.4 cm ON

18.5 in. YOU

50° BIG

30.6 ft A

825 ft WHO

8.7 cm WHEN

733 ft FROG

3° PLAYER

17.8 in. SMOKE

23° HIT

680 ft UNICORN

48° A

62° CROSS

28.5 ft OVER