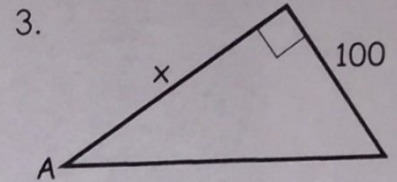
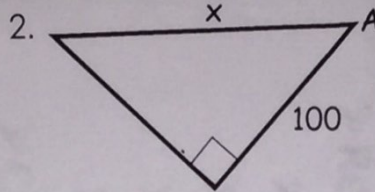
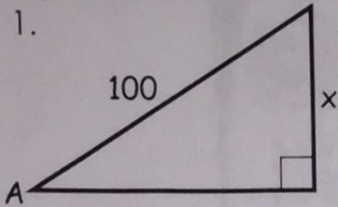


Name: _____ Date: _____

Find the Missing Side Practice

Give the trigonometric ratio which relates 100 and x to $\angle A$. Write an equation to represent the relationship. You do not have to solve for A . Just set up the equation.



Solve for x . Show your equation and circle your answer.

